

The SAT[®]

Practice Test #1

Make time to take the practice test.
It's one of the best ways to get ready
for the SAT.

After you've taken the practice test, score it
right away at sat.org/scoring.





Math Test – No Calculator

25 MINUTES, 20 QUESTIONS

Turn to Section 3 of your answer sheet to answer the questions in this section.

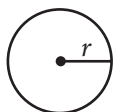
DIRECTIONS

For questions 1-15, solve each problem, choose the best answer from the choices provided, and fill in the corresponding circle on your answer sheet. For questions 16-20, solve the problem and enter your answer in the grid on the answer sheet. Please refer to the directions before question 16 on how to enter your answers in the grid. You may use any available space in your test booklet for scratch work.

NOTES

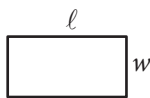
- The use of a calculator **is not permitted**.
- All variables and expressions used represent real numbers unless otherwise indicated.
- Figures provided in this test are drawn to scale unless otherwise indicated.
- All figures lie in a plane unless otherwise indicated.
- Unless otherwise indicated, the domain of a given function f is the set of all real numbers x for which $f(x)$ is a real number.

REFERENCE

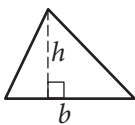


$$A = \pi r^2$$

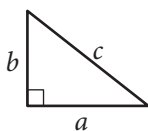
$$C = 2\pi r$$



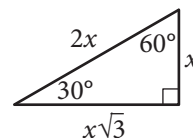
$$A = \ell w$$



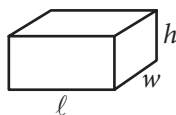
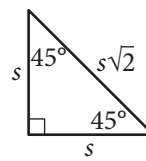
$$A = \frac{1}{2}bh$$



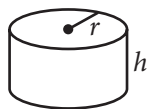
$$c^2 = a^2 + b^2$$



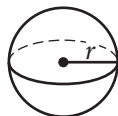
Special Right Triangles



$$V = \ell wh$$



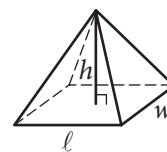
$$V = \pi r^2 h$$



$$V = \frac{4}{3}\pi r^3$$



$$V = \frac{1}{3}\pi r^2 h$$



$$V = \frac{1}{3}\ell wh$$

The number of degrees of arc in a circle is 360.

The number of radians of arc in a circle is 2π .

The sum of the measures in degrees of the angles of a triangle is 180.



1

If $\frac{x-1}{3} = k$ and $k = 3$, what is the value of x ?

- A) 2
- B) 4
- C) 9
- D) 10

2

For $i = \sqrt{-1}$, what is the sum $(7 + 3i) + (-8 + 9i)$?

- A) $-1 + 12i$
- B) $-1 - 6i$
- C) $15 + 12i$
- D) $15 - 6i$

3

On Saturday afternoon, Armand sent m text messages each hour for 5 hours, and Tyrone sent p text messages each hour for 4 hours. Which of the following represents the total number of messages sent by Armand and Tyrone on Saturday afternoon?

- A) $9mp$
- B) $20mp$
- C) $5m + 4p$
- D) $4m + 5p$

4

Kathy is a repair technician for a phone company. Each week, she receives a batch of phones that need repairs. The number of phones that she has left to fix at the end of each day can be estimated with the equation $P = 108 - 23d$, where P is the number of phones left and d is the number of days she has worked that week. What is the meaning of the value 108 in this equation?

- A) Kathy will complete the repairs within 108 days.
- B) Kathy starts each week with 108 phones to fix.
- C) Kathy repairs phones at a rate of 108 per hour.
- D) Kathy repairs phones at a rate of 108 per day.



5

$$(x^2y - 3y^2 + 5xy^2) - (-x^2y + 3xy^2 - 3y^2)$$

Which of the following is equivalent to the expression above?

- A) $4x^2y^2$
- B) $8xy^2 - 6y^2$
- C) $2x^2y + 2xy^2$
- D) $2x^2y + 8xy^2 - 6y^2$

6

$$h = 3a + 28.6$$

A pediatrician uses the model above to estimate the height h of a boy, in inches, in terms of the boy's age a , in years, between the ages of 2 and 5. Based on the model, what is the estimated increase, in inches, of a boy's height each year?

- A) 3
- B) 5.7
- C) 9.5
- D) 14.3

7

$$m = \frac{\left(\frac{r}{1,200}\right)\left(1 + \frac{r}{1,200}\right)^N}{\left(1 + \frac{r}{1,200}\right)^N - 1} P$$

The formula above gives the monthly payment m needed to pay off a loan of P dollars at r percent annual interest over N months. Which of the following gives P in terms of m , r , and N ?

- A) $P = \frac{\left(\frac{r}{1,200}\right)\left(1 + \frac{r}{1,200}\right)^N}{\left(1 + \frac{r}{1,200}\right)^N - 1} m$
- B) $P = \frac{\left(1 + \frac{r}{1,200}\right)^N - 1}{\left(\frac{r}{1,200}\right)\left(1 + \frac{r}{1,200}\right)^N} m$
- C) $P = \left(\frac{r}{1,200}\right) m$
- D) $P = \left(\frac{1,200}{r}\right) m$



8

If $\frac{a}{b} = 2$, what is the value of $\frac{4b}{a}$?

- A) 0
- B) 1
- C) 2
- D) 4

9

$$3x + 4y = -23$$

$$2y - x = -19$$

What is the solution (x, y) to the system of equations above?

- A) $(-5, -2)$
- B) $(3, -8)$
- C) $(4, -6)$
- D) $(9, -6)$

10

$$g(x) = ax^2 + 24$$

For the function g defined above, a is a constant and $g(4) = 8$. What is the value of $g(-4)$?

- A) 8
- B) 0
- C) -1
- D) -8

11

$$b = 2.35 + 0.25x$$

$$c = 1.75 + 0.40x$$

In the equations above, b and c represent the price per pound, in dollars, of beef and chicken, respectively, x weeks after July 1 during last summer. What was the price per pound of beef when it was equal to the price per pound of chicken?

- A) \$2.60
- B) \$2.85
- C) \$2.95
- D) \$3.35

12

A line in the xy -plane passes through the origin and has a slope of $\frac{1}{7}$. Which of the following points lies on the line?

- A) $(0, 7)$
- B) $(1, 7)$
- C) $(7, 7)$
- D) $(14, 2)$



13

If $x > 3$, which of the following is equivalent

to $\frac{1}{\frac{1}{x+2} + \frac{1}{x+3}}$?

A) $\frac{2x+5}{x^2+5x+6}$

B) $\frac{x^2+5x+6}{2x+5}$

C) $2x+5$

D) x^2+5x+6

14

If $3x - y = 12$, what is the value of $\frac{8^x}{2^y}$?

A) 2^{12}

B) 4^4

C) 8^2

D) The value cannot be determined from the information given.

15

If $(ax+2)(bx+7) = 15x^2 + cx + 14$ for all values of x , and $a+b=8$, what are the two possible values for c ?

A) 3 and 5

B) 6 and 35

C) 10 and 21

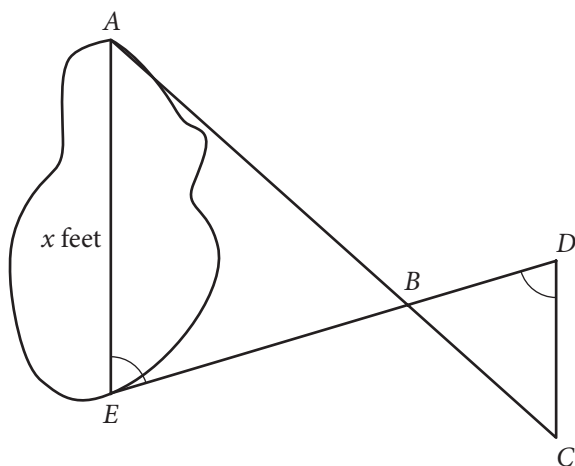
D) 31 and 41



16

If $t > 0$ and $t^2 - 4 = 0$, what is the value of t ?

17



A summer camp counselor wants to find a length, x , in feet, across a lake as represented in the sketch above. The lengths represented by AB , EB , BD , and CD on the sketch were determined to be 1800 feet, 1400 feet, 700 feet, and 800 feet, respectively. Segments AC and DE intersect at B , and $\angle AEB$ and $\angle CDB$ have the same measure. What is the value of x ?

18

$$\begin{aligned}x + y &= -9 \\x + 2y &= -25\end{aligned}$$

According to the system of equations above, what is the value of x ?

19

In a right triangle, one angle measures x° , where

$$\sin x^\circ = \frac{4}{5}. \text{ What is } \cos(90^\circ - x^\circ) ?$$

20

If $a = 5\sqrt{2}$ and $2a = \sqrt{2x}$, what is the value of x ?

STOP

**If you finish before time is called, you may check your work on this section only.
Do not turn to any other section.**



Math Test – Calculator

55 MINUTES, 38 QUESTIONS

Turn to Section 4 of your answer sheet to answer the questions in this section.

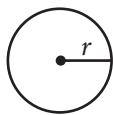
DIRECTIONS

For questions 1-30, solve each problem, choose the best answer from the choices provided, and fill in the corresponding circle on your answer sheet. For questions 31-38, solve the problem and enter your answer in the grid on the answer sheet. Please refer to the directions before question 31 on how to enter your answers in the grid. You may use any available space in your test booklet for scratch work.

NOTES

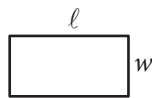
- The use of a calculator **is permitted**.
- All variables and expressions used represent real numbers unless otherwise indicated.
- Figures provided in this test are drawn to scale unless otherwise indicated.
- All figures lie in a plane unless otherwise indicated.
- Unless otherwise indicated, the domain of a given function f is the set of all real numbers x for which $f(x)$ is a real number.

REFERENCE

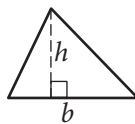


$$A = \pi r^2$$

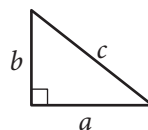
$$C = 2\pi r$$



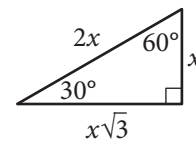
$$A = \ell w$$



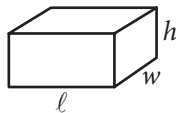
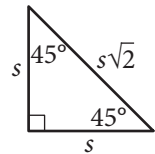
$$A = \frac{1}{2}bh$$



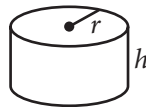
$$c^2 = a^2 + b^2$$



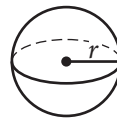
Special Right Triangles



$$V = \ell wh$$



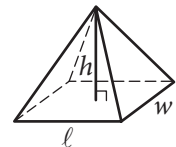
$$V = \pi r^2 h$$



$$V = \frac{4}{3}\pi r^3$$



$$V = \frac{1}{3}\pi r^2 h$$



$$V = \frac{1}{3}\ell wh$$

The number of degrees of arc in a circle is 360.

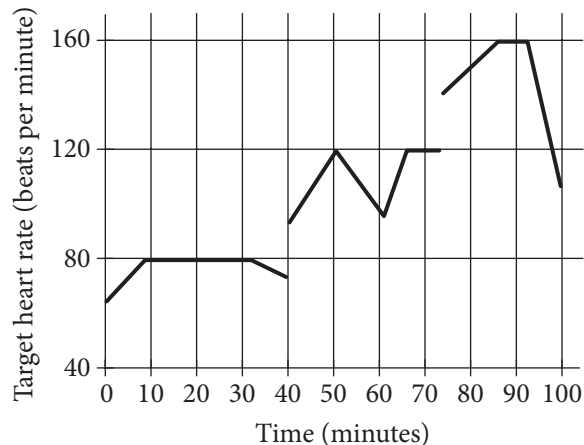
The number of radians of arc in a circle is 2π .

The sum of the measures in degrees of the angles of a triangle is 180.



1

John runs at different speeds as part of his training program. The graph shows his target heart rate at different times during his workout. On which interval is the target heart rate strictly increasing then strictly decreasing?



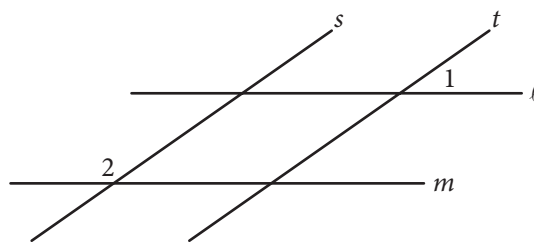
- A) Between 0 and 30 minutes
- B) Between 40 and 60 minutes
- C) Between 50 and 65 minutes
- D) Between 70 and 90 minutes

2

If $y = kx$, where k is a constant, and $y = 24$ when $x = 6$, what is the value of y when $x = 5$?

- A) 6
- B) 15
- C) 20
- D) 23

3



In the figure above, lines l and m are parallel and lines s and t are parallel. If the measure of $\angle 1$ is 35° , what is the measure of $\angle 2$?

- A) 35°
- B) 55°
- C) 70°
- D) 145°

4

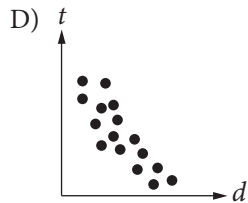
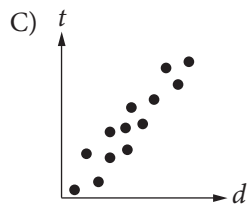
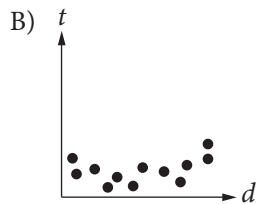
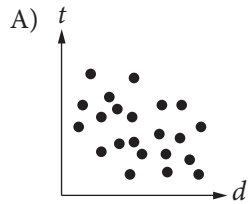
If $16 + 4x$ is 10 more than 14, what is the value of $8x$?

- A) 2
- B) 6
- C) 16
- D) 80



5

Which of the following graphs best shows a strong negative association between d and t ?



6

$1 \text{ decagram} = 10 \text{ grams}$ $1,000 \text{ milligrams} = 1 \text{ gram}$

A hospital stores one type of medicine in 2-decagram containers. Based on the information given in the box above, how many 1-milligram doses are there in one 2-decagram container?

- A) 0.002
- B) 200
- C) 2,000
- D) 20,000